

Finding the Area of Rectangles

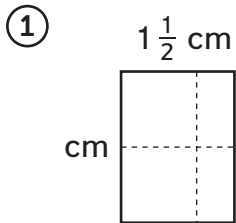
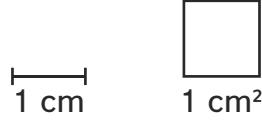
Home Link 1-3

NAME _____

DATE _____

TIME _____

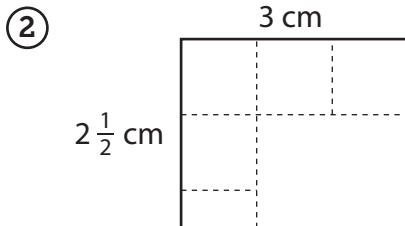
Find the area of the rectangles below. Write a number sentence for each problem and explain how you found the area.



Area = _____

Number sentence: _____

Explanation:



Area: _____

Number sentence: _____

Explanation:

Practice

Solve.

③ 36 inches = _____ feet

④ _____ inches = 5 feet

⑤ 18 inches = _____ feet

⑥ $\frac{1}{2}$ foot = _____ inches